

ESKON

Ermittlung schulischer **Kompetenzen** bei **neu Zugezogenen**

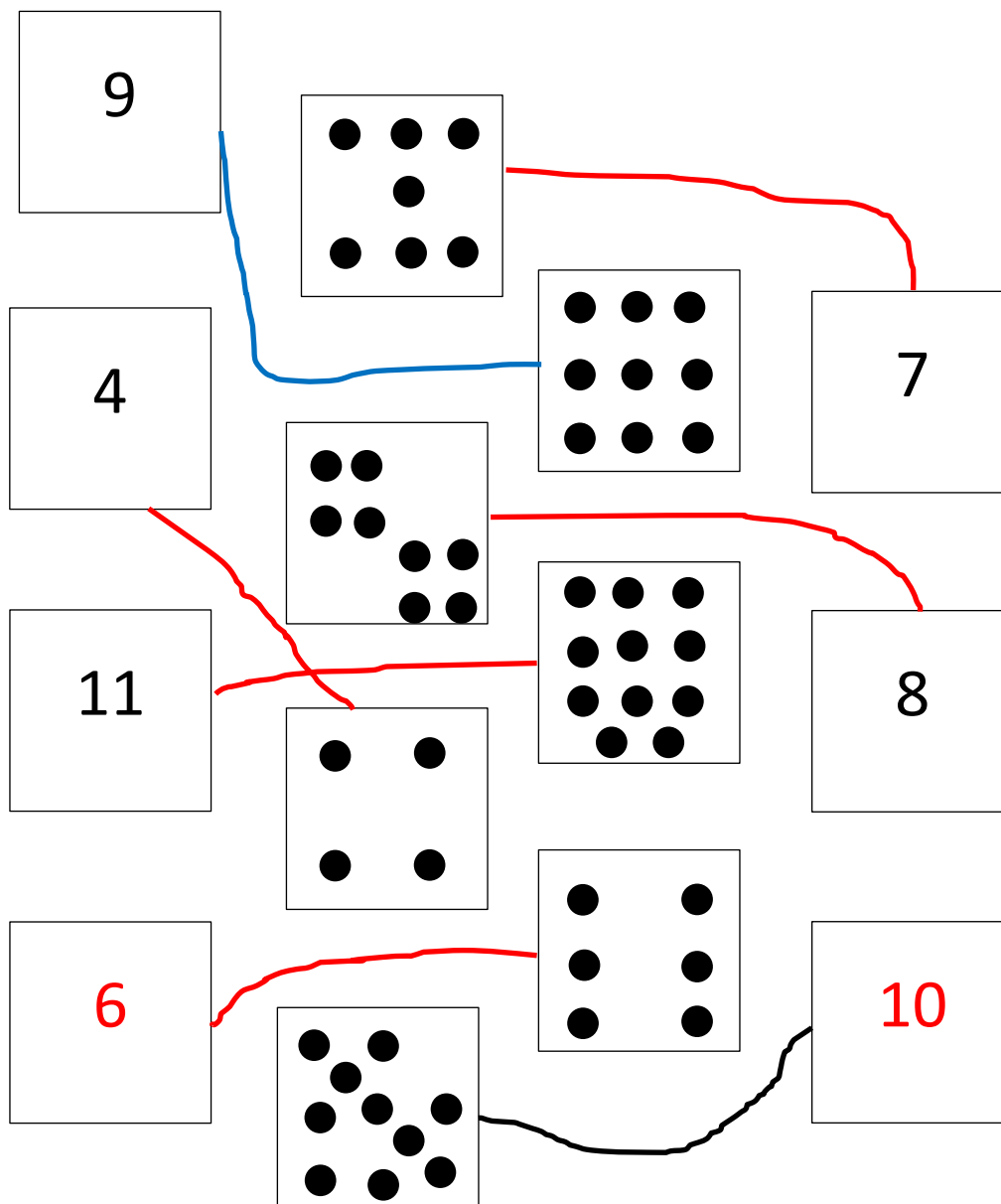
MATHEMATIK

Aufgabenset 0 bis 2 Jahre Schulerfahrung

Aufgaben

1

a)



b)



$$10 + 10 + 10 + 10 + 10 + 2 = 52$$

$$10 + 10 + 10 + 7 = 37$$


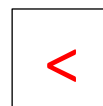

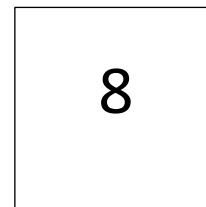
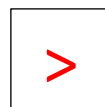




$$10 + 10 + 10 + 10 + 10 + 10 + 4 = 64$$

$$10 + 10 + 9 = 29$$

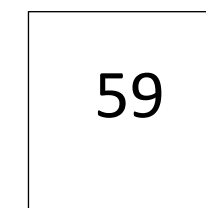
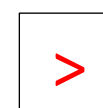
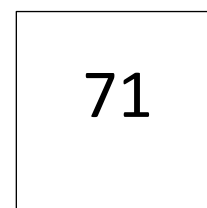
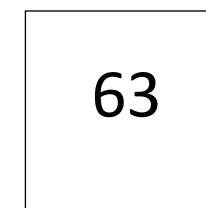
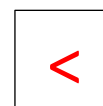
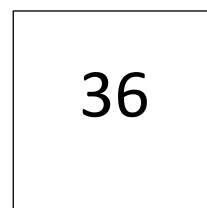
2



a)



b)



3

$2 + 2 = \underline{4}$

$\underline{6} - 5 = 1$

$4 + \underline{5} = 7 + 2$

a)

$2 + 5 = 7$

$4 + 3 = 7$

$6 + 3 = 9$

$7 + 4 = 11$

$9 + 2 = 11$

$10 + 8 = 18$

$6 - 2 = 4$

$7 - 4 = 3$

$9 - 2 = 7$

$10 - 7 = 3$

$13 - 4 = 9$

$12 - 9 = 3$

b)

$6 + 2 = 4 + 4$

$9 - 6 = 7 - 4$

$20 + 7 = 10 + 17$

$6 + 5 = 16 - 5$

$6 \cdot 3 = 18$

$4 \cdot 8 = 32$

$7 \cdot 2 = 14$

$5 \cdot 5 = 25$

$2 \cdot 9 = 9 + 9$

$7 \cdot 8 = 8 \cdot 7$

4

a)

$$1 \text{ m} = 100 \text{ cm}$$

$$1 \text{ h} = 60 \text{ min}$$

$$2 \text{ m} = 200 \text{ cm}$$

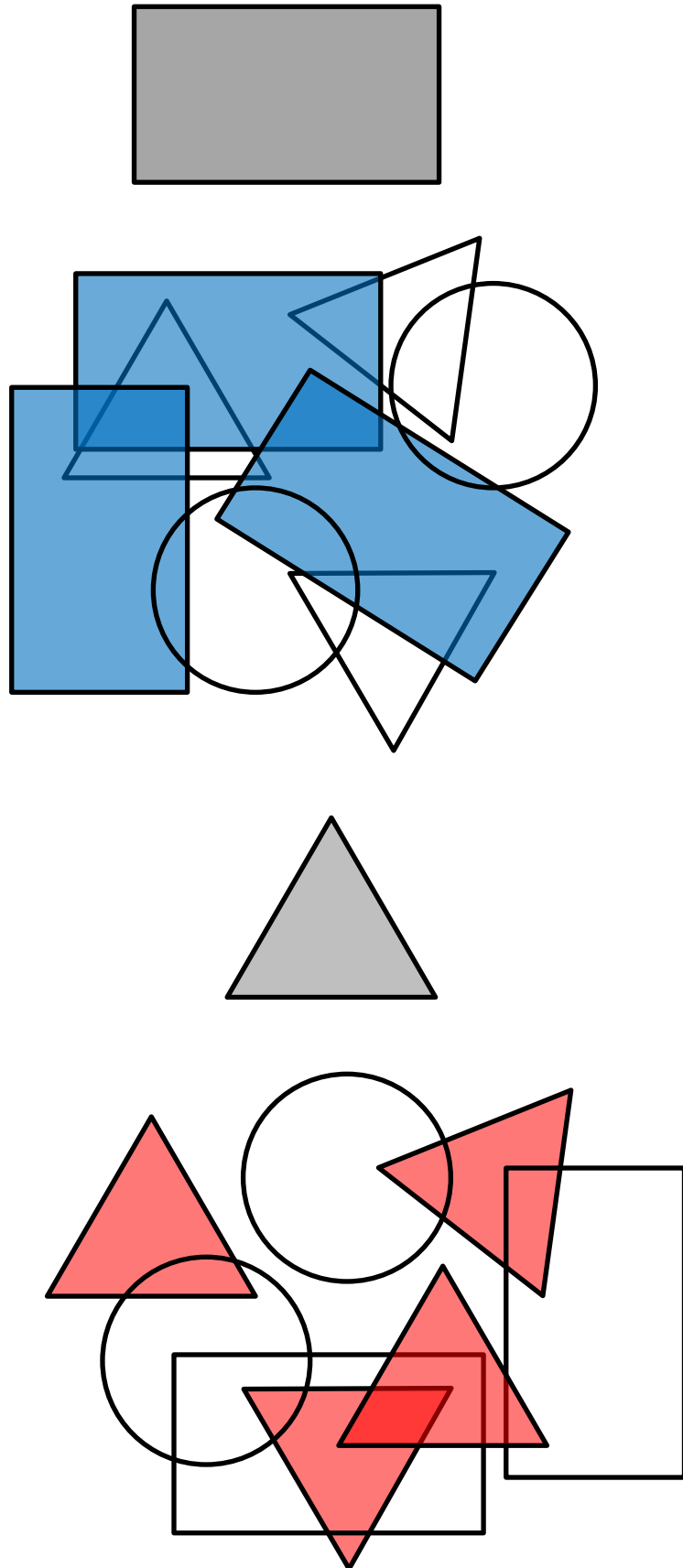
$$2 \text{ h} = 120 \text{ min}$$

b) Zusammen wie viele Franken?

Zusammen **28** Fr.

5

a)



b)

